



Determine if the angle shown is 'less', 'more' or 'equal' to 90°.

Answers

Ex)



1)



2)



Ex. less

1. \_\_\_\_\_

2. \_\_\_\_\_

3)



4)



5)



3. \_\_\_\_\_

4. \_\_\_\_\_

6)



7)



8)



6. \_\_\_\_\_

7. \_\_\_\_\_

9)



10)



11)



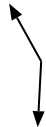
9. \_\_\_\_\_

10. \_\_\_\_\_

12)



13)



14)



12. \_\_\_\_\_

13. \_\_\_\_\_

15)



16)



17)



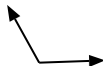
15. \_\_\_\_\_

16. \_\_\_\_\_

18)



19)



20)



18. \_\_\_\_\_

19. \_\_\_\_\_

20. \_\_\_\_\_

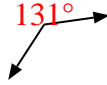


Determine if the angle shown is 'less', 'more' or 'equal' to  $90^\circ$ .

Ex)



1)



2)



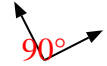
Ex.

**less**

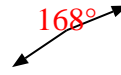
3)



4)



5)



1.

**more**

2.

**more**

3.

**less**

4.

**equal**

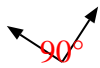
5.

**more**

6)



7)



8)



6.

**equal**

7.

**equal**

8.

**equal**

9)



10)



11)



9.

**more**

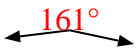
10.

**less**

11.

**equal**

12)



13)



14)



12.

**more**

13.

**more**

14.

**less**

15)



16)



17)



15.

**less**

16.

**equal**

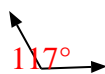
17.

**less**

18)



19)



20)



18.

**equal**

19.

**more**

20.

**equal**